

Question Paper Booklet Number
(Candidate to enter and bubble this number in the
OMR Answer Sheet)

230878

KEY SOLUTION

Signature of the invigilator
(to be obtained by the candidate)

Hall Ticket Number
(To be filled by the candidate below)

Chalaga

24 24 99 24 6

Duration : 150 Minutes

Max. Marks : 150

INSTRUCTIONS TO CANDIDATES

- CANDIDATE SHOULD READ ALL THE INSTRUCTIONS PRINTED ON THE QUESTION PAPER BOOKLET BEFORE STARTING TO ANSWER.
- Candidate shall write the Hall Ticket Number in the box provided on this Question Paper Booklet before opening the SEAL.
- Candidate should not open the Question Paper Booklet SEAL, until the indication is given by the invigilator to start answering.
- On opening the Question Paper Booklet SEAL and before entering the Question Paper Booklet Number on the OMR Answer Sheet ensure that the Question Paper Booklet contains all the 150 multiple choice questions printed on it. If there are any defects like missing papers, missing questions, improper print, please ask the invigilator for replacement of the Question Paper Booklet immediately.
- Only after satisfying that the Question Paper Booklet is in full shape, the candidate shall enter the Question Paper Booklet Number on the OMR Answer Sheet.
- Each question is followed by 4 choices : (1),(2),(3)and(4). Candidate has to select only one answer choice and darken the appropriate circle for that question in the OMR Answer Sheet. If more than one circle is darkened for any question, it will be considered as invalid.
- Candidate has to obtain the signature of the invigilator in the appropriate box provided on the Question Paper Booklet.
- Rough work should be done only in the space provided for that purpose in the Question Paper Booklet. No other loose sheet of paper will be allowed into the Examination hall.
- Do not mark answer choices on the Question Paper Booklet. The digital copy of each candidate's answered OMR Answer Sheet will be made available in the candidate's login in due course.
- The Question Paper Booklet is printed bilingually. viz., English/Telugu or English/Urdu. In case of any discrepancy between English and Telugu or between English and Urdu versions, English version shall be treated as final. If appropriate word for any English word is not found in Telugu or Urdu, it would be transliterated.
- Candidate should not leave the Examination hall until the completion of the examination time.
- Candidate should not leave the Examination hall without giving the biometric attendance. If any candidate does not give his/her biometric attendance, his/her OMR Answer Sheet would not be evaluated.
- Before leaving the Examination hall, the candidate should hand over the OMR Answer Sheet to the invigilator failing which Criminal Prosecution will be initiated as per law, besides rejecting the candidature for this examination.
- Candidates are permitted to take away the Question Paper Booklet with them after completion of the examination and it should be preserved till the declaration of results.

అభ్యర్థులకు సూచనలు

- అభ్యర్థులు సమాధానాలను గుర్తించి వృత్తాలను నింపే ముందే ప్రశ్నాపత్రం లోని సూచనలన్నిటినీ తప్పనిసరిగా చదువవలెను.
- అభ్యర్థులు తమ హాల్ టికెట్ సంఖ్యను ప్రశ్నపత్రము పై నిర్దేశిత ఫలములో సీల్ తెరవకముందే పూరించవలెను.
- అభ్యర్థులు సీలు చేయబడిన ప్రశ్నాపత్రాలను ఇన్విజిలేటర్ ఆదేశాలు జారీ చేయునంత వరకు తెరవకూడదు.
- ప్రశ్నపత్రము యొక్క సీల్ తొలగించిన వెంటనే మరియు OMR సమాధాన పత్రములో ప్రశ్నాపత్రం నెంబర్ ను నింపకముందే అందులోని 150 ప్రశ్నలు, వాటికిచ్చిన ఇచ్చికాలు అన్ని సరిగా ముద్రింపబడాయో లేదో జాగ్రత్తగా పరిశీలించండి. ఏదైనా పేజీలు లేకపోయినా లేదా సరిగా ముద్రింపబడకపోయినా వెంటనే ఇన్విజిలేటర్ ను సంప్రదించి మరియు ప్రశ్నపత్రాన్ని పొందగలరు.
- ప్రశ్నపత్రము లోని అన్ని పేజీలు పూర్తిగా మరియు సరిగా ఉన్నవని నిర్ధారించుకున్న తరువాత OMR సమాధాన పత్రము నందు నిర్దేశించిన ఫలములో ప్రశ్నపత్రము యొక్క బుక్ లేట్ సంఖ్య పూరించవలెను.
- ప్రతి ప్రశ్నకు నాలుగు ఐచ్చికాలు అనగా (1), (2), (3) మరియు (4) ఇవ్వబడతాయి. అందులో ఒక సమాధానమును మాత్రమే ఎన్నుకొని దానికి సంబంధించిన వృత్తాన్ని మాత్రమే నింపవలెను. ఒక ప్రశ్నకు ఒకటికంటే ఎక్కువ వృత్తాలను నింపినచో ఆ ప్రశ్న చెల్లనిదిగా పరిగణించబడుతుంది.
- ప్రశ్నపత్రము పై నిర్దేశించబడిన ఫలములో ఇన్విజిలేటర్ సంతకము పొందవలెను.
- ప్రశ్నపత్రము లో నిర్దేశించబడిన ఫలమును మాత్రమే చిత్త పని (rough work) కొరకు ఉపయోగించవలెను. పరీక్ష గదిలోకి విడి కాగితములను అనుమతించబడవు.
- సమాధాన ఐచ్చికాలను ప్రశ్నాపత్రము పై గుర్తు పెట్టడం అనుమతించబడదు. పరీక్షకు హాజరైన ప్రతి అభ్యర్థి OMR సమాధాన పత్రము యొక్క డిజిటల్ స్కాన్ కోపీని అభ్యర్థి లాగిన్ లో తగిన సమయంలో అందుబాటులో ఉంచబడును.
- ప్రశ్న పత్రము రెండు భాషలలో (ఇంగ్లీష్/తెలుగు, ఇంగ్లీష్/ఉర్దూ) ముద్రింపబడినది. ప్రశ్నాపత్రము నందు ఇంగ్లీష్/పర్షియన్ మరియు తెలుగు/ఉర్దూ/పర్షియన్ల మధ్య ఏదైనా వ్యత్యాసం ఉంటే, ఇంగ్లీష్/పర్షియన్లో ఉన్నదే సరియైనది గా పరిగణించబడుతుంది. ఏదైనా ఇంగ్లీష్ పదానికి సరైన తెలుగు లేదా ఉర్దూ పదము లేనిచో, ఇంగ్లీష్ పదమునే తెలుగు/ఉర్దూ లలో వ్రాయబడును.
- పరీక్ష పూర్తయ్యే వరకు అభ్యర్థి పరీక్ష గదిని విడిచి వెళ్ళటానికి అనుమతించబడదు.
- బయోమెట్రిక్ అటెండెన్స్ ఇవ్వకుండా అభ్యర్థి పరీక్ష గదిని వదిలి వెళ్ళడానికి అనుమతించబడదు. ఒకవేళ అలా వెళ్ళినట్లయితే OMR సమాధాన పత్రము మూల్యాంకనం చేయబడదు.
- అభ్యర్థులు తప్పనిసరిగా OMR సమాధాన పత్రమును తిరిగి ఇచ్చివేయవలెను లేనిచో క్రిమినల్ ప్రాసీక్యూషన్ చేయడం తో పాటు అభ్యర్థి యొక్క అభ్యర్థిత్వం రద్దు చేయబడును.
- పరీక్ష అనంతరం ప్రశ్నా పత్రాన్ని అభ్యర్థులు తమ వెంట తీసుకొని వెళ్ళవచ్చు. పరీక్ష ఫలితాలను వెల్లడించేవరకు తమ వద్ద ప్రశ్న పత్రాన్ని భద్ర పరచుకోవలెను.



TSPSC GROUP- I - 2024
QUESTION PAPER WISE ANALYSIS

INDIAN HISTORY	11 TO 18
TELANGANA ART & CULTURE	88 TO 102
GEOGRAPHY	76 TO 78 , 82 TO 87
POLITY	1 TO 10 , 60
ECONOMY & TELANGANA ECONOMY	51 TO 59
GOVERNANCE & GOVT SCHEMES	76 TO 78 , 82 TO 87 ,
INDIAN CURRENT AFFAIRS & INTERNATIONAL EVENTS	108 TO 126 , 145 TO 150
TELANGANA CURRENT AFFAIRS	79 TO 81 , 103 TO 107
SCIENCE & TECHNOLOGY	127 TO 144
REASONING & APTITUDE	25 TO 45

INDIAN HISTORY	6
TELANGANA ART & CULTURE	17
GEOGRAPHY	9
POLITY	11
ECONOMY & TELANGANA ECONOMY	9
GOVERNANCE & GOVT SCHEMES	20
INDIAN CURRENT AFFAIRS & INTERNATIONAL EVENTS	25
TELANGANA CURRENT AFFAIRS	9
SCIENCE & TECHNOLOGY	18
REASONING & APTITUDE	21
ENVIRONMENT	5
TOTAL	150

**BEST AUTHENTIC KEY WE TRIED,
*MEANS OPTIONS WRONG**

**IF YOU WANT TO SHINE LIKE THE SUN-
THEN BURN LIKE THE SUN**

1. Match the following Articles of the Constitution of India with their Provision :

- | Article | Provision |
|---------------|--|
| A. Article 14 | I. Abolition of untouchability |
| B. Article 16 | II. Equality of opportunity in Public Employment |
| C. Article 17 | III. Equality before the law |
| D. Article 18 | IV. Abolition of titles |

Choose the correct answer :

- (1) A-II; B-I; C-IV; D-III
(3) A-I; B-III; C-II; D-IV

- (2) A-III; B-II; C-I; D-IV
(4) A-I; B-II; C-III; D-IV

2. The Parliament enacted the Untouchability (Offences) Act, 1955. Which of the following became the first case before the Supreme Court under the Act ?

(1) Vimalash Tomar Vs. State of Haryana

(2) State of Kerala Vs. Gulab Singh

(3) Posts & Telegraphs (P & T) Scheduled Caste/Tribe Employees' Welfare Association Vs. Union of India

(4) State of Karnataka Vs. Appa Balu Ingale

3. Dr. B.R. Ambedkar, on the debate of "due process" in the Constituent Assembly, observed that :

A. it involves the relation between legislature and judiciary.

B. in a federal system, it is about judiciary deciding law as ultra vires or intra vires.

C. It involves the adjustment of federal arrangement.

Choose the correct answer :

(1) A, B and C are true.

(3) Only A and C are true.

(2) Only B and C are true.

(4) Only A and B are true.

4. Which of the following is an essential feature of a Federal Constitution ?

(1) Distribution of Powers

(2) Supremacy of Judiciary

(3) Parliamentary Supremacy

(4) Election Commission

5. Consider the following in relation to Article 368 of the Constitution :

A. It empowers the Parliament to amend the Constitution.

B. It empowers the Parliament to amend the Constitution by 2/3 majority.

C. It does not empower the Parliament to amend the Fundamental Rights.

D. The Parliament can amend any provisions of the Constitution except Basic Structure.

Which of the above statements are correct ?

(1) A, B, C and D are true.

(3) Only A, B and D are true.

(2) Only A, B and C are true.

(4) Only A and B are true.

6. Which of the following pairs are correct in relation to the Articles of the Directive Principles of State Policy ?

A. Article 39 A : Free legal aid

B. Article 43 A : Workers participation in the management of industry

C. Article 48 A : Safeguarding rights of the children

D. Article 51 : Promote international peace and security

Choose the correct answer :

(1) A, B and D only

(3) A, C and D only

(2) B, C and D only

(4) A, B and C only

7. The role of the State Election Commission is :

(1) To conduct elections to Community based organisations

(3) To conduct elections to State Cooperatives

(2) To conduct elections to Local Bodies

(4) To conduct elections to State Legislatures

Handwritten scribbles and a large 'B' at the bottom of the page.

8. Consider the following in relation to the election of the members of the Parliament :
- ~~A.~~ Lok Sabha members are elected directly on the basis of adult suffrage.
 - ~~B.~~ Rajya Sabha members are indirectly elected on the basis of adult suffrage.
 - ~~C.~~ A few Rajya Sabha members are nominated by the Prime Minister for special knowledge.
 - ~~D.~~ Rajya Sabha members are allotted to each state based on the geographical area.

Which of the above statements are correct ?

(1) A and D only (2) A, B and D only

(3) A and B only (4) A, B and C only

9. The Constitution (4th Amendment Act), 1955 introduced the concept of Eminent Domain. The concept includes :

- A. The Police power to detain persons for public purpose
- B. The power to impose taxes on citizens for public welfare
- ~~C.~~ The legal capacity to take private property for public purpose
- D. The legal capacity to share public burden

Choose the correct answer :

(1) D only

(2) B, C and D only

(3) C only

(4) A and B only

10. Consider the following statements :

- A. The Supreme Court has recognised that casting of vote is a form of speech.
- B. The voter has the right to know the antecedents of the candidate who is contesting elections.

Which of the above statements is/are correct ?

(1) Neither A nor B is true.

(2) Only B is true.

(3) Both A and B are true.

(4) Only A is true.

11. Consider the following statements :

- A. Mahatma Gandhi wrote a book, 'Indian Opinion', to apprise the British Government of the widespread discontent among Indians.
- B. 'Hind Swaraj', written by Mahatma Gandhi in Gujarati in 1909 was proscribed by the Government of Bombay and then in 1910 it was published in English in London.

Which of the above statements is/are correct ?

(1) Neither A nor B

(2) B only

(3) Both A and B

(4) A only

12. Arrange the following in chronological order according to their year of establishment :

- A. Aligarh Scientific Society
- B. Benares Debating Club
- C. Bihar Scientific Society
- D. Society for Translating European Sciences
- E. Indian Association for the Cultivation of Science

Choose the correct order :

(1) D, B, A, C, E

(2) B, C, D, A, E

(3) B, E, A, D, C

(4) D, E, A, B, C

13. Which of the following statements about Indian National Army (I.N.A.) are correct ?

- A. I.N.A. had fighting brigades named after Gandhi, Subhas and Rani Jhansi.
- B. The slogans of I.N.A. were 'Jai Hind' and 'Delhi Door Hai' (Delhi is far).
- C. Rashbehari Bose handed over the leadership to Subhas Chandra Bose.
- D. Capt. Mohan Singh was the commander of the Indian National Army.

Choose the correct answer :

(1) A, B, C and D

(2) A, C and D only

(3) B, C and D only

(4) A and B only

14. Which studio produced the first Telugu talkie film "Bhakta Pahlada" ?
 * ~~(1) Madras National Theatre~~ (2) Bharat Movietone
 (3) Madan Theatres (4) Ranjit Movietone

15. Which among these paintings are by Raja Ravi Varma ?
 A. Lady Lost in Thought B. Nair Woman
 C. Bride and Two Companions D. Lady Giving Alms at the Temple

The correct answer is :
~~(1) A, C and D only~~ (2) A, B and C only
 (3) A, B and D only (4) B, C and D only

16. Which of the following statements about Raja Rammohan Roy is/are correct ?
 A. He favoured polygamy.
 B. He established the Vedanta College in 1825.

Choose the correct answer :
~~(1) Neither A nor B~~ (2) B only
 (3) Both A and B (4) A only

17. Consider the following statements about religious conditions under Kakatiyas :
 A. Shaivism flourished.
 B. Jain Temples were destroyed.
 C. No Vaishnavacharya was mentioned in any of the inscriptions of the Kakatiya rulers.
 D. There was no rivalry between Shaivism and Vaishnavism in general.

Which of the above statements are correct ?
 (1) B and D only (2) A, B and C only
~~(3) A, B, C and D~~ (4) A and B only

18. Match the following :

- | | |
|---------------------------|---------------------|
| A. Bhavabhuti | I. Devichandragupta |
| B. Harshavardhana | II. Malatimadhava |
| C. Mahendra-Vikramavarman | III. Mattavilasa |
| D. Visakhadatta | IV. Nagananda |

Choose the correct answer :
~~(1) A-III; B-II; C-IV; D-I~~ (2) A-II; B-IV; C-III; D-I
 (3) A-II; B-I; C-III; D-IV (4) A-III; B-IV; C-II; D-I

19. Match the following about Drinking Water Standards, (BIS 10500 : 2012) with acceptable limits :

Metal	Acceptable limit (mg L ⁻¹)
A. Fe	I. 5.0
B. Mn	II. 0.3
C. Cu	III. 0.05
D. Zn	IV. 0.1

Choose the correct answer :
 (1) A-IV; B-III; C-I; D-II
 (2) A-II; B-IV; C-III; D-I
 (3) A-I; B-IV; C-II; D-III
 (4) A-II; B-III; C-I; D-IV

20. Sort the following steps in the correct order of photochemical smog production :
- Emission of NO_x and VOCs.
 - Ozone production due to the reaction between NO_x and VOCs.
 - Ozone reacts with other pollutants and forms NO_2 and O_2 .
 - Peroxy Acyl Nitrate (PAN) is produced by the reaction between NO_2 and hydrocarbons.
- Choose the correct order :
- (1) A, D, B, C (2) A, C, B, D (3) **A, B, C, D** (4) A, D, C, B

21. Match the commonly used modern drugs with their plant sources :

Drug	Plant Source
A. Penicillin	I. Velvet bean
B. L-DoPa	II. Yellow cinchona
C. Quinine	III. Penicillium fungi
D. Taxol	IV. Pacific yew

Choose the correct answer :

- (1) **A-III; B-I; C-II; D-IV** (2) A-IV; B-III; C-I; D-II
- (3) A-I; B-II; C-III; D-IV (4) A-III; B-IV; C-I; D-II
22. Which of the following statements are true about greenhouse gases ?
- Greenhouse gases absorb long wave radiation from the Earth.
 - ~~The greenhouse effect is responsible for heating of the Earth's surface and atmosphere.~~
 - ~~The greenhouse effect causes El Nino effect.~~
 - Few of the direct greenhouse gases under Kyoto Protocol are CO_2 , CH_4 , SF_6 and SO_2 .

The correct answer is :

- (1) **A, B and C only** (2) B and C only
- (3) ~~A, C and D only~~ (4) ~~A and B only~~
23. Collapsing of polar vortex contributes to the stabilization of the ozone layer because it :
- Triggers the release of additional chlorine into the stratosphere
 - Disperses ozone-destroying forms of chlorine**
 - Accelerates ozone depletion reactions
 - Allows ozone depleting chemicals to accumulate

24. Select the correct set of statements regarding the effects of climate change :
- Reduced agricultural productivity, decrease in renewable energy sources, increased polar populations
 - ~~Decrease in global temperatures, increased sea ice, expansion of tropical forests~~
 - ~~Decrease in ocean's acidity, reduced CO_2 emission, increased glacier mass~~
 - Increased sea level, more intense hurricanes, species migration**

25. Question : Is that year a leap year ?

- 1st January and 31st December of that year are not the same days of the week.
- The year has 53 Sundays.

Choose the right option among the following :

- Both I and II put together do not suffice to answer the question.**
- II alone is sufficient to answer the question.
- I and II together are sufficient to answer the question.
- I alone is sufficient to answer the question.**

Handwritten calculations:

$$\begin{array}{r} 36 \times 52 \\ 25 \\ \hline 1872 \\ 125 \\ \hline 1997 \end{array}$$

362

2

26. Let $A = 20\%$ of $x + 80\%$ of y
and $B = 70\%$ of $x + 30\%$ of y
where x is greater than y .

If $k\%$ of $(x - y)$ is $(B - A)$, then what is the value of k ?

- (1) 50 (2) 30

$x = 100, y = 5$
 $A = 20 + 40 = 60$
 $B = 70 + 12 = 82$

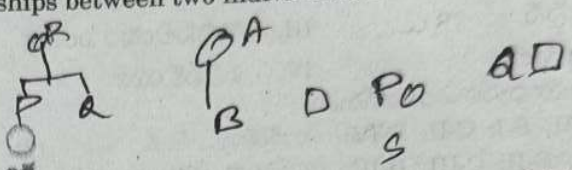
$k\% \text{ of } 50 = 22$
(4) 20

27. Rahul starts walking from his house towards the playground which is 200 meters away in the direction of East from his house. After walking 60 m, he turns left and walks 20 m. He then turns right and walks 40 m. Again he turns right and walks 40 m. After that, he turns left and walks 20 m and finally turns left and walks 20 m and reaches the point P. Then, what is the ratio between the distance yet to be travelled along the straight road to reach the playground and the total distance walked during travelling in reaching the point P?

- (1) 1 : 2 (2) 2 : 5 (3) 3 : 5 (4) 1 : 5

28. A notation representing the blood relationships between two individuals A and B is given below :

- A + B means A is the mother of B.
- A - B means A is the brother of B.
- A @ B means A is the father of B.
- A & B means A is the sister of B.
- A % B means A is the daughter of B.



For the given four individuals P, Q, R and S, using the notation given above, which one of the following shows that P is the mother-in-law of S?

- (1) $P + Q - R @ S$ (2) $P \& Q + R @ S$ (3) $P + Q @ R \% S$ (4) $P @ R \& S$

29. In the following, the 2nd term is written using the 1st term with a definite rule. If the 4th term is to be written following the same rule as applied to the 3rd term, then the term in place of '?' is :

SELECT : TIUUBD :: FORMAT : ?

- (1) GSABZD (2) GSACZE (3) GSACZD (4) GSACXD

30. In the following, there are two terms on each side of :: . The first two are related to each other by following a certain rule. By following the same analogy, the 4th term which follows the same rule with the 3rd term from the option is

(2, 3, 5) : (5, 7, 11) :: (11, 13, 17) : ?

- (1) (17, 23, 29) (2) (17, 19, 21) (3) (17, 19, 23) (4) (17, 21, 23)

31. In the following letter series, six blank spaces are given. By filling these blanks with appropriate letters, the series becomes a series with definite pattern. Choose the right option that makes the series with a definite pattern.

xy z yz x z x yxy z y z xz _ y

- (1) z, x, y, y, z, x (2) z, x, x, z, z, x (3) x, y, z, x, y, z (4) x, x, x, y, y, z

32. A club has 2780 members belonging to various professions, whose details are shown in the following table :

Profession	Number of members	Ratio between males and females
Doctors	750	3 : 2
Engineers	990	4 : 1
Lawyers	270	5 : 4
Professors	770	4 : 3

What is the difference between the number of male and female members?

- (1) 884 (2) 888 (3) 882

abc defghijklmnopqrstuvwxy

$600 : 450 = 4 : 3$
 $792 : 198 = 4 : 1$
 $150 : 120 = 5 : 4$
 $440 : 330 = 4 : 3$

$440 - 330 = 110$
 $110 \times 8 = 880$



33. In an examination, 27 students passed in English (E), 29 students passed in Hindi (H), 25 students passed in Telugu (T); 10 students passed in E and H; 8 students passed in H and T; and 6 students passed in E and T. The number of students who passed in each subject alone was equal, and was 15. A total of 70 students wrote the exams in all the three subjects.

Match the following List A with the List B :

- List A
- A. The number of students who passed in T and H, but not in E
- B. The number of students who have failed in all the three subjects
- C. The number of students who passed in all the three subjects
- D. The number of students who passed in two subjects only
- List B
- I. 9
- II. 12
- III. 16
- IV. 34
- V. 4

E - 27
H - 29
T - 25

Choose the correct answer :

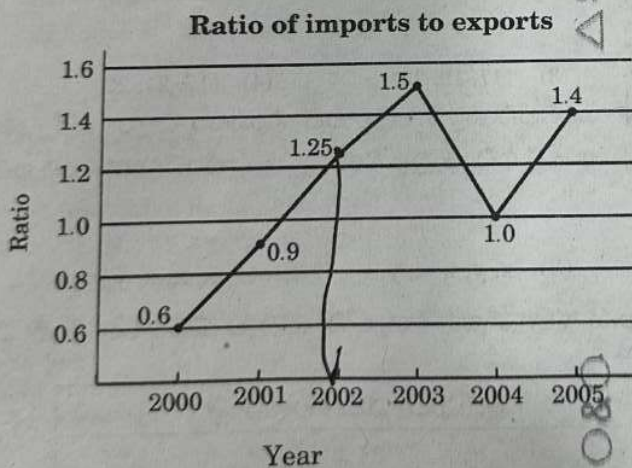
(1) A-IV; B-I; C-V; D-II

(2) A-II; B-III; C-IV; D-V

(3) A-I; B-III; C-IV; D-V

(4) A-IV; B-II; C-III; D-I

34. In the following graph, the ratio of the amount of imports and amount of exports of a company over the period of time 2000 - 2005 is given.



2002
 $\frac{125}{100} = \frac{\text{Imports}}{\text{Exports}}$

2003
 Exports = 300

$\frac{150}{100} = \frac{450}{300}$

If the imports in 2002 were valued at ₹ 250 crores, and the value of total exports in the years 2002 and 2003 together was ₹ 500 crores, then the imports in 2003 were (in ₹ crores) :

(1) 420

(2) 500

(3) 450

(4) 525



35.

In the following table, the numbers in the third column are related to the respective numbers in the first and second columns with a definite relation. Find the suitable number in place of '?'.

2209	784	15
3249	1444	19
4489	?	13

(1) 3016

(2) 1140

(3) 2918

(4) 3254

36.

In a degree programme of a college, the number of students who opted for only Physics is twice the number of students who opted for Chemistry. The number of students who opted only for Chemistry is twice the number of students who opted for both Physics and Chemistry. Then the number of students who opted for Physics is how many times the number of students who opted for both Physics and Chemistry?

(1) 3

(2) 7

(3) 6

(4) 5

37.

Consider the following addition :

$$\begin{array}{r} A \ B \ C \ 9 \\ + \ C \ A \ B \ 8 \ B \\ \hline B \ 2 \ 9 \ 2 \ C \end{array}$$

where A, B and C represent three different digits from 0 to 9.

Which of the following two inequalities is/are correct?

I. $A + B - C \leq 7$

II. $2A - 3B < 4C$

(1) Neither I nor II is correct.

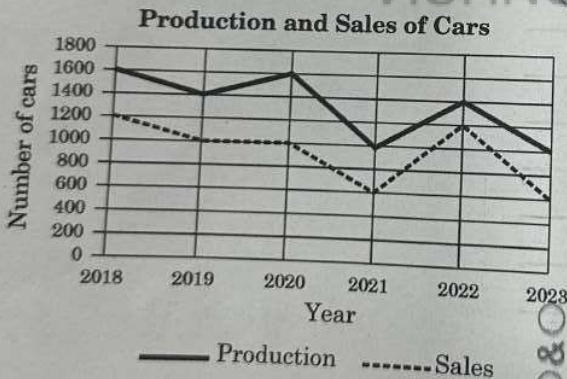
(2) Only II is correct.

(3) Both I and II are correct.

(4) Only I is correct.

38.

Production and sale of a certain brand of cars for six years is given in the following graph. Study the graph carefully and answer the question.



What is the difference between the averages of production and sales over the given six-year period?

(1) 380

(2) 420

(3) 400

(4) 450

39.

The angle between both the minutes and hours hands of a clock at 7:42 AM is x° and at 5:18 PM is y° . Then the sum of x° and y° is :

(1) 54°

(2) 30°

(3) 43°

(4) 72°

TEST 2.24

[R]



(14)

$$\begin{array}{r} 1366 \\ 930 \\ \hline \end{array}$$

$$\begin{array}{r} 366 \\ 360 \\ \hline 6 \\ 30 \end{array}$$

TEST 2.24

35.

క్రింది పట్టిక సంఖ్యలతో

2209	784	15
3249	1444	19
4489	?	13

(1) 3016

36.

ఒక కళాశాల విద్యార్థుల శాస్త్రాలను విద్యార్థుల

(1) 3

37.

క్రింది స

A, B మ

క్రింది వ

I. A +

(1) I వ

(3) I వ

38.

ఆరు స ఇవ్వబ

180

160

140

120

100

80

60

40

20

ఆరు స


(1) 38

39.

ఒక గడి సమయ

(1) 54

40. The following pie chart shows the sale of different vegetables in a shop.

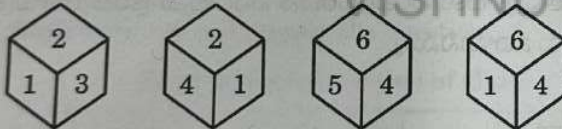


Consider the following statements :

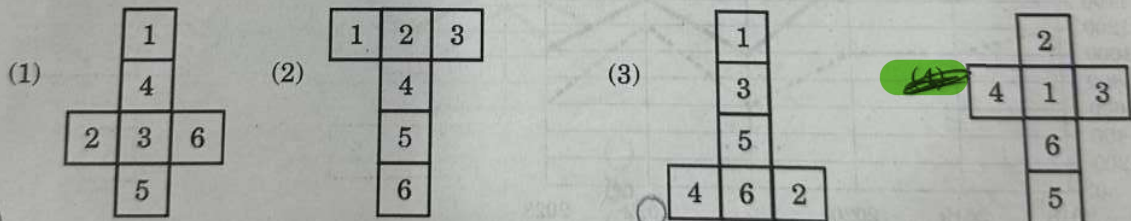
- ~~A.~~ Sum of sales of pumpkins and drumsticks is equal to that of cabbage.
~~B.~~ People are buying beans more than cabbage.
~~C.~~ Potatoes are the best-selling vegetables in the shop.
~~D.~~ Potatoes and beans collectively account for half of the total sales.

Which of the above statements are correct ?

- (1) A and D only
 (2) C and D only
 (3) A, C and D only
 (4) A, B and C only
41. Which of the following statement(s) is/are true ?
 I. The year 2024 has 53 Mondays. ~~26~~ 2
 II. The year 2027 has 53 Saturdays.
 III. The year 2028 ends with a Saturday.
 Choose the correct answer.
 (1) Only I and II are true.
 (2) Only II is true.
 (3) All I, II and III are true.
 (4) Only I is true.
42. The following are different positions of the same dice, whose faces are numbered from 1 through 6.



If this dice is opened, it looks like which one of the following figures ?



43. Is $y > x$?

Statements :

I. $x \neq 0, xy > xq \Rightarrow y < q$

II. $y \neq 0, \frac{l}{y} < \frac{x}{y} \Rightarrow l < x$

Choose the right option among the following :

- (1) Neither I nor II is sufficient to answer the question.
 (2) Only II is sufficient to answer the question.
 (3) Both I and II together are sufficient to answer the question.
 (4) Only I is sufficient to answer the question.

44. Six persons P, Q, R, S, T and U are sitting around a circular table. P, Q and R are facing the centre of the table whereas the backs of the other three are facing the centre. Second to the left of P is the one opposite to U. T is second to the left of U and opposite to P. If T and S are immediate neighbours of Q, then who is sitting opposite to R?

(1) P

~~(2) T~~

~~(3) Q~~

(4) S



45. Find the next number in the following series :

1, 3, 15, 45, 101, 191, _____

(1) 323

(2) 321

~~(3) 322~~

(4) 320

46. Consider the following statements :

- I. Crime against women is lower in a state with higher literacy rate.
 II. Higher literacy rate leads to better economy.

Read the statements carefully and choose the most suitable option among the following :

~~(1) Both I and II are independent effects of the same cause.~~

(2) II is the cause and I is its effect.

(3) Both I and II are effects of independent causes.

(4) I is the cause and II is its effect.



47. Consider the following statements and conclusions. Identify the right conclusion(s), which follow(s) the given statements.

Statements :

I. Some employees are managers.

II. All managers are engineering graduates.

Conclusions :

P. All employees are engineering graduates.

Q. All engineering graduates are managers.

~~R. Some employees are engineering graduates.~~

Choose the most suitable option :

(1) Only P

(2) Only R and P

(3) Only P and Q

~~(4) Only R~~

48. A statement is given below which is to be taken as true, followed by two assumptions. Decide which of the given assumption(s) implicitly follow(s) from the statement.

Statement :

The pass percentage of the students of a college significantly increased.

Assumptions :

I. Most of the students go for higher studies.

II. Students studied more efficiently than before.

Choose the correct option :

(1) Neither I nor II is implicit

~~(2) Only II is implicit~~

(3) Both I and II are implicit

(4) Only I is implicit

49. Consider the following statement and conclusions. Identify the right conclusion(s), which follow(s) the given statements.

Statement :

As it stands today, some Indian sports are not what they were once. India had significant victories in Football and Hockey earlier.

Conclusions :

I. Presently, we have no good players of Football and Hockey in our country.

II. India lost many Football and Hockey matches in recent years.

Choose the correct option :

(1) Neither I nor II

~~(2) Only II~~

(3) Both I and II

(4) Only I



50. Which of the following schemes is aimed at promoting chemical-free natural farming ?
 (1) Viksit Kisan Bharat Scheme 2.0
 (2) Agricultural Mechanization Scheme
 (3) Farmer-Producer Organisation Scheme
 (4) **Bharatiya Prakritik Krishi Paddhati**
51. Which of the following statements is/are true in relation to Telangana Economy, as per the data provided in Telangana Economy Provisional Estimates - 2023 published by the Directorate of Economics and Statistics of Government of Telangana ?
 A. Gross State Domestic Product of Telangana at current prices was more than thirteen lakh crore rupees in 2022 - 23.
 B. Telangana's Industrial sector achieved a growth rate of 13% in 2022 - 23.
 Choose the correct answer :
 (1) Neither A nor B (2) B only
 (3) **A only** (4) Both A and B
52. According to the Household Consumption Expenditure Survey 2022 - 23, which of the following statements are true ?
 A. Chhattisgarh has the lowest rural and urban Monthly Per Capita Expenditure (MPCE).
 B. Rural-urban difference in average MPCE is the lowest in Meghalaya.
 C. Sikkim has the highest rural and urban MPCE.
 D. Chandigarh has the lowest MPCE in urban areas.
 Choose the correct answer :
 (1) **B and D only** (2) B and C only
 (3) **A and C only** (4) A and B only
53. Which of the following statements related to Interim Union Budget 2024 - 25 are true ?
 A. In the total outlay of the Union Budget, the share of Gender budget is more than six percent.
 B. Estimated Fiscal Deficit is more than five percent of Gross Domestic Product.
 C. Tax receipts are estimated at less than 25 lakh crore rupees.
 D. The increase in Gender budget allocation is 20% more in 2024 - 25 budget as compared to the budget estimates of 2023 - 24.
 Choose the correct answer :
 (1) **A, B and D only** (2) B and C only
 (3) C and D only (4) A and B only
54. As per the Telangana Socio Economic Outlook - 2023, which of the following pairs related to the district and the Gross District Domestic Product (GDDP) of that district in 2021 - 22 (First Revised Estimates) at current prices is/are correctly matched ?
- | Name of District | GDDP (in ₹ lakh crores) approximately |
|-----------------------|---------------------------------------|
| A. Hyderabad | : ₹ 1.86 |
| B. Rangareddy | : ₹ 2.20 |
| C. Medchal-Malkajgiri | : ₹ 1.20 |
| D. Adilabad | : ₹ 1.05 |
- Choose the correct answer :
 (1) A only (2) C and D only
 (3) B and C only (4) **A, B and D only**
55. As per the National Family Health Survey - 5, arrange the following States in descending order in terms of percentage of multidimensionally poor in total population during 2019 - 21 :
 A. Meghalaya B. Uttar Pradesh C. Jharkhand D. Bihar
 Choose the correct order :
 (1) D, A, B, C (2) ~~B, C, D, A~~
 (3) **D, C, A, B** (4) ~~A, B, C, D~~



56. Which of the following statements are true in relation to the Five Year Plans of India?
- A. One of the main objectives of the 5th Five Year Plan was 'Removal of Poverty'.
 - B. To achieve Growth with Stability was one of the objectives of the 4th Five Year Plan.
 - C. The focus of the 7th Plan was on Food, Work and Productivity.
 - D. The main objective of 9th Plan was to achieve Inclusive Growth.

Choose the correct answer :

(1) A, B, C and D

(2) A, B and C only

(3) A and D only

(4) B, C and D only

57. Which one of the following statements is/are true about the progress of the Sustainable Development Goal 2 (SDG 2)?

- A. The world is not on track to achieve zero hunger target by 2030.
- B. Burden of malnutrition in all its forms remains a challenge.

Choose the correct answer :

(1) Neither A nor B

(2) B only

(3) Both A and B

(4) A only

58. As per the vote on account budget of Telangana for the financial year 2024 - 25, presented to the State Assembly on 10th February, 2024, the estimated total expenditure is approximately :

(1) ₹ 2.39 lakh crore

(2) ₹ 2.40 lakh crore

(3) ₹ 2.76 lakh crore

(4) ₹ 2.95 lakh crore

59. As per the data provided in Telangana Socio Economic Outlook 2023, the share of Construction sector (a sub-sector of Secondary sector) in Total Gross State Value Added of Secondary sector of Telangana (at current prices and provisional advance estimates) in 2022 - 23 was around :

(1) 23%

(2) 14%

(3) 19%

(4) 27%

60. Which of the following statements about Article 15 is/are correct?

A. The State shall not discriminate against any citizen on grounds only of religion, race, caste, place of birth or any of them.

B. Nothing in this Article shall prevent the State from making any special provision for women and children.

C. Equality before law.

Choose the correct answer :

(1) B only

(2) A and C only

(3) A, B and C

(4) A and B only

61. Which of the following statements about National Food Security Act, 2013 (NFSA) is/are correct?

A. It provides coverage up to 75% of the total rural population.

B. It covers the two categories of beneficiaries, i.e. Antyodaya Anna Yojana (AAY) households and the priority households.

C. Pregnant women and lactating mothers are not entitled to get a free meal at the local Anganwadi centres, as well as the maternity benefits.

D. It includes only mid-day-meal schemes.

Choose the correct answer :

(1) A and D only

(2) B only

(3) A, B, C and D

(4) A and B only

62. Match the following Acts with the year :

- Act
- A. The SCs and STs (Prevention of Atrocities) Act
 - B. National Commission for Safai Karamcharis Act
 - C. Child Labour (Prohibition of Regulation) Act
 - D. Rights of Persons with Disabilities Act

- Year
- I. 2016
 - II. 1986
 - III. 1993
 - IV. 1989

Choose the correct answer :

- (1) ~~A-IV; B-III; C-II; D-I~~
- (3) A-III; B-IV; C-I; D-II

- (2) A-II; B-I; C-III; D-IV
- (4) A-I; B-II; C-IV; D-III

63. Which of the following statements about the objectives of Pradhan Mantri Anusuchit Jati Abhyuday Yojana (PM-AJAY) are correct?

- A. To improve socio-economic developmental indicators by ensuring adequate infrastructure and requisite services in the SC dominated villages.
- B. To increase literacy and encourage enrolment of SCs in school and higher educational institutions with residential facilities.
- C. To reduce poverty of the SC communities by generating additional employment opportunities through skill development.
- D. It is a merged scheme of three Centrally sponsored yojanas namely – Pradhan Mantri Abhyuday Gram Yojana (PMAGY), Babu Jagjivan Ram Chhatrawas Yojana (BJRCY) and Atal Bihari Vajpayee Abhyuday Yojana (AVYAY).

Choose the correct answer :

- (1) ~~A and D only~~
- (3) ~~A, B, C and D~~

- (2) ~~A, B and C only~~
- (4) ~~A and B only~~

64. Which Ministry inaugurated 'Garima Greh', a shelter home for transgender persons ?

- (1) ~~Ministry of Social Justice and Empowerment~~
- (2) Ministry of Women and Child Development
- (3) Ministry of Housing and Urban Affairs
- (4) Ministry of Health and Family Welfare

65. Which of the following Article of the Indian Constitution is not related to economic safeguards provided to the Scheduled Castes ?

- (1) ~~Article 34~~
- (2) Article 46
- (3) Article 24
- (4) Article 23

66. Match the following health missions with the launching year :

- | Name of Health Mission | Launching Year |
|---|----------------|
| A. National Rural Health Mission | I. 2018 |
| B. National AYUSH Mission | II. 2008 |
| C. National Mission on Medicinal Plants | III. 2005 |
| D. National Health Protection Mission | IV. 2014 |

Choose the correct answer :

- (1) ~~A-III; B-IV; C-II; D-I~~
- (3) ~~A-IV; B-II; C-III; D-I~~

- (2) ~~A-II; B-I; C-IV; D-III~~
- (4) ~~A-III; B-IV; C-I; D-II~~

67. Consider the following statements.

Assertion (A) :

Democratic decentralisation provided space for the deprived and marginalised social sections their collective bargains and to get their due share in local governance and development process.

Reason (R) :

Decentralisation and democratisation process helps to protect the interests of the most excluded social groups like Scheduled Castes, Scheduled Tribes and women.

Choose the correct answer :

(1) Both (A) and (R) are true, but (R) is not the correct explanation of (A).

(2) Both (A) and (R) are true and (R) is the correct explanation of (A).

(3) (A) is false, but (R) is true.

(4) (A) is true, but (R) is false.

68. Which of the following is/are true in relation to the Pradhan Mantri Kaushal Yojana 2016 - 2020 ?

A. It is a grant-based scheme, providing free of cost skill development training and certification.

B. It had two components known as Centrally Sponsored Centrally Managed and State Sponsored State Managed.

C. It provided skill development training to school, college dropouts and unemployed youth.

D. It initiated a process of creating a registry of skills.

Choose the correct answer :

(1) A, B, C and D

(2) A, B and D only

(3) A, C and D only

(4) A, B and C only

69. Which of the following measures did the Second Administrative Reforms Commission suggest in its reports to ensure ethics in governance ?

A. Liability of corrupt public servants to pay damages

B. Protecting whistle blowers

C. Continuation of discretionary funds at the disposal of legislators

D. Restoring Official Secrets Act

Choose the correct answer :

(1) A, B and D only

(2) A and C only

(3) C and D only

(4) A and B only

70. Which of the following are areas where the civil society organisations can contribute to governance ?

A. Mobilizing people to take part in public affairs ✓

B. Promoting cross-cutting business groups

C. Improving transparency in governance ✓

D. Promoting competitiveness for individual gains

Choose the correct answer :

(1) B, C and D only

(2) A and B only

(3) A and C only

(4) B and D only

71. The Cabinet Secretariat of India is organised in three wings. Which one of the following is a part of the three wings ?

(1) Agricultural Policy Wing

(3) Fiscal Policy Wing

(2) Social Policy Wing

(4) Military Wing

72. Which of the following statements in relation to SWADHAR Greh Scheme are true ?
- It is meant for Tribal women.
 - It is funded by the Union and State Governments.
 - It builds houses for women.
 - It provides legal aid and guidance to women.
- Choose the correct answer :
- (1) B and D only
(2) B and C only
(3) A, B and D only
(4) A and B only
73. Which of the following schemes/provisions is/are specifically meant for the socio-economic development of Scheduled Tribes ?
- PM Adi Adarsh Gram Yojana
 - PM Janjatiya Vikas Mission
 - Grants under Article 275(1) of the Constitution
 - Atal Vayo Abhyuday Yojana
- Choose the correct answer :
- (1) B, C and D only
(2) A, B and C only
(3) D only
(4) A only
74. Which of the following models of District Administration that emerged in post-independent India is true ?
- The first model emphasises separation of regulatory functions from development functions.
 - The second model stipulates combining regulatory and development functions, under the control of District Collector.
 - The third model recommended by Sarkaria Commission was for unification of regulatory and development functions at the district level and decentralization at lower levels.
- Choose the correct answer :
- (1) A and B only
(2) A and C only
(3) B and C only
(4) A and B only
75. Consider the following in relation to the Production Linked Incentive (PLI) Scheme for National Programme on High Efficiency Solar Modules :
- The scheme is implemented by the Ministry of Power, Government of India.
 - It aims to develop an ecosystem for sourcing of local materials in solar manufacturing.
- Which of the above statements is/are correct ?
- (1) Neither A nor B
(2) B only
(3) Both A and B
(4) A only
76. Consider the following statements with reference to the mineral 'manganese' in India :
- Odisha is the state with the highest reserves in India.
 - It is an essential input in steel-making in alloy form.
 - Pyrolusite is the ore of manganese.
 - The Gondite and Kodurite deposits are rich in manganese ore.
- Which of the above statements is/are correct ?
- (1) A, B, C and D
(2) A and B only
(3) A, B and C only
(4) A only
77. Consider the following statements related to the Mumbai Trans Harbour Link (MTHL) :
- It is a Road Bridge connecting Mumbai city with Navi Mumbai.
 - It begins in Parel, South Mumbai and crosses Thane Creek and terminates at Chirle near Nhava Sheva.
- Which of the above statements is/are correct ?
- (1) Neither A nor B
(2) B only
(3) Both A and B
(4) A only

78. Consider the following statements :
 A. Aswaraopeta Assembly constituency area extends to the easternmost part/boundary of Telangana State.
 B. Adilabad Assembly constituency area extends to the northernmost part/boundary of Telangana State.

Which of the above statements is/are correct ?
 (1) Neither A nor B
 (2) B only
 (3) Both A and B
 (4) A only

79. Consider the following statements :
 A. Koulasnala and Boggulavagu irrigation projects are located in the Godavari basin.
 B. Kotepally Vagu and Asif Nahar irrigation projects are located in the Krishna basin.

Which of the above statements is/are correct ?
 (1) Neither A nor B
 (2) B only
 (3) Both A and B
 (4) A only

80. Arrange the following districts in ascending order in terms of their Female Literacy Rate (%) based on 2011 Census :
 A. Nagarkurnool B. Medak C. Jogulamba Gadwal D. Narayanpet E. Wanaparthy

Choose the correct order :
 (1) C, A, D, E, B (2) D, A, C, E, B (3) C, D, E, B, A (4) C, D, A, B, E

81. According to Köppen's climatic classification, a larger area of the Telangana State falls under :

- (1) Hot semi-arid climate (BShw)
- (2) Humid Sub-tropical climate (CWa)
- (3) Monsoon climate (Am)
- (4) Tropical Savanna climate (Aw)

82. Match the following National parks and their States :

<i>National Park</i>	<i>State</i>
A. Tadoba National Park	I. Karnataka
B. Madhav National Park	II. Uttar Pradesh
C. Dudhwa National Park	III. Maharashtra
D. Bandipur National Park	IV. Madhya Pradesh

Choose the correct answer :

- (1) A-III; B-IV; C-II; D-I
- (2) A-III; B-IV; C-I; D-II
- (3) A-I; B-IV; C-II; D-III
- (4) A-IV; B-III; C-II; D-I

83. The terms 'Aus', 'Aman', and 'Boro' are related to which crop grown in a year ?

- (1) Three crops of maize grown in Rajasthan
- (2) Three crops of paddy grown in West Bengal
- (3) Three crops of cotton grown in Maharashtra
- (4) Three crops of wheat grown in Punjab

84. Which of the following climate is also known as 'Sclerophyll' ecosystem or biome ?

- (1) Monsoon climate
- (2) Tundra climate
- (3) Equatorial climate
- (4) Mediterranean climate

85. Consider the following two statements :

Assertion (A) :

Orographic precipitation results when moving moisture-laden air strikes a topographic barrier and is forced upwards.

Reason (R) :

Most of the precipitation falls on the windward side of the barrier and the leeward side is likely to be dry.

Choose the correct answer :

- (1) Both (A) and (R) are true, but (R) is not the correct explanation of (A).
(2) Both (A) and (R) are true and (R) is the correct explanation of (A).
(3) (A) is false, but (R) is true.
(4) (A) is true, but (R) is false.

86. Which of the following statements about Continental Shelf are correct ?

- A. Continental Shelves are continental marginal areas submerged under oceanic water.
B. Continental Shelves are very wide and extensive along the western coast of South America where high mountains are very close and parallel to the coast.
C. Extensive Continental Shelves are found around Newfoundland.
D. Many marginal seas are located on the Continental Shelves of North Atlantic.

Choose the correct answer :

- (1) A, B, C and D
(2) A, B and C only
(3) A, C and D only
(4) A and B only

87. Which of the following fluvial landforms are associated with rejuvenated topography ?

- A. Incised meander
B. Entrenched meander
C. Knickpoint
D. Natural levees

Choose the correct answer :

- (1) A, B and C only
(2) B, C and D only
(3) A, C and D only
(4) A, B, C and D

88. Consider the following statements :

- A. Jayaprasena referred to a dance form called Kollata in his work "Nrittaratnavali".
B. This dance was performed by Dommaras in Telangana.

Which of the above statements is/are correct ?

- (1) Neither A nor B (2) B only
(3) Both A and B (4) A only

89. Consider the following statements :

- A. Baddegewara temple is built at Vemulawada.
B. 'Kalyanakaraka' was a book on medicine in Prakrit.

Which of the above statements is/are correct ?

- (1) Neither A nor B (2) B only
(3) Both A and B (4) A only

90. Consider the following statements :

- A. Pampa Kavi's 'Vikramarjunavijaya' throws some light on Mudigonda Chalukyas.
B. Krivvaka inscription mentions the conflict between Mudigonda Chalukyas and Rashtrakutas.

- Which of the above statements is/are correct ?
(1) Neither A nor B (2) B only
(3) Both A and B (4) A only

91. Name the foreign traveller who visited Golconda in the month of 'Muharram' and reported clashes between the Shia and Sunni sects of Muslims.
 (1) Duarte Barbosa
 (2) **Jean-Baptiste Tavernier**
 (3) François Bernier
 (4) Jean de Thévenot
92. Consider the following statements :
 A. The Qutb Shahi style of architecture was a mixture of Persian, Hindu and Mughal styles.
 B. The Bala Hisar Gate has the figures and emblems of Hindu mythology.
 C. During the time of Abul Hasan, a temple at Anantagiri was renovated.
 D. Shias Emblem of Five is inscribed on Charakamans.
 Which of the above statements are correct ?
 (1) B and D only
 (2) B and C only
 (3) **A, C and D only**
 (4) A and B only
93. Arrange the following institutions in Hyderabad in chronological order of their inception :
 A. The School of Engineering
 B. St. George's Grammar School
 C. Madarasa-i-Aliya
 D. Dar-ul-Uloom Oriental High School
 Choose the correct order :
 (1) A, B, C, D
 (2) D, B, C, A
 (3) **B, C, D, A**
 (4) B, D, A, C
94. Who among the following was the author of "Prataparudra Yasobhushanam" ?
 (1) Sakalya Malla
 (2) Mallinatha
 (3) Iswara Suri
 (4) **Vidyanatha**
95. Consider the following statements :
 A. At Srisailam, God Mallikarjuna was called Chenchuramayya.
 B. Tikkana propagated the Harihara cult in his Mahabharata.
 C. 'Anantarundhati Vrata' was an important activity during the Kakatiya period.
 D. The Panditaradhya matha was located at Tirupati.
 Which of the above statements are correct ?
 (1) C and D only
 (2) A and C only
 (3) B and C only
 (4) A and B only
96. Match the following authors with their works :
- | Author | Work |
|-------------------|---------------------------|
| A. Singama Nayaka | I. Chandodarpanam |
| B. Peddana | II. Vikramarka Charitra |
| C. Ananta | III. Ratnapancalika |
| D. Jakkana | IV. Kavyalankara Cudamani |
- Choose the correct answer :
 (1) A-I; B-II; C-III; D-IV
 (2) A-III; B-IV; C-II; D-I
 (3) **A-III; B-IV; C-I; D-II**
 (4) A-IV; B-III; C-II; D-I
97. Identify the correct pair of the following :
 (1) Rallapalli Anantha Krishna Sastry - Palle Patalu
 (2) Kodati Narayana Rao - Bala Sundari
 (3) Punna Anjaiah - Neelagiri Kavula Sanchika
 (4) **Suravaram Pratapa Reddy - Golconda Panditula Sanchika**

98. Arrange the following organisations in chronological order of their establishment :
 A. Matangi Sabha
 B. Arundatiya Mahasabha
 C. Ambedkar Youth League
 D. Munnurukapu Mahasabha
 Choose the correct order :
 (1) B, C, D, A (2) A, B, D, C (3) C, D, B, A (4) C, B, A, D
99. Consider the following statements about Ikshvaku Sri Shantamula :
 A. He patronised Vedic Religion.
 B. He performed Asvamedha yagna at Jaggaiahpet.
 C. He had donated Hiranyas to Buddhist Sanghas and Jain Basadis.
 D. He was a devotee of Mahasena Virupaksha.
 Which of the above statements are incorrect ?
 (1) C and D (2) B and C (3) B and D (4) A and B
100. Which of the following was the Mahasanghika centre during the Vishnukundin period in Telangana?
 (1) Indrapalanagaram (2) Keesara (3) Kallacheruvu (4) Bavapuri
101. Consider the following statements :
 A. Fourfold division of the society had taken shape only after the Satavahana period.
 B. The Joint family system was not followed during the Satavahana period.
 Which of the above statements is/are correct ?
 (1) Neither A nor B (2) B only (3) Both A and B (4) A only
102. What is the Buddhist prayer hall called ?
 (1) Arama (2) Vihara (3) Chaitya (4) Stupa
103. Consider the following in relation to the supply of LPG domestic cylinder at subsidised rates under the Mahalakshmi Scheme :
 A. The scheme is applicable to white ration card holders.
 B. The State Government would transfer the required amount to the Oil Marketing Companies (OMC) on an annual basis.
 C. The OMCs on their part would transfer the subsidy amount by Direct Benefit Transfer to the beneficiaries.
 D. The supply is limited to average of the last five years of consumption of cylinders by the respective household.
 Which of the above statements are correct ?
 (1) A and D only (2) A, B and C only (3) A and C only (4) A, B, C and D
104. Match the following lift irrigation projects/barrage with the rivers :
 List I
 Lift irrigation project / barrage
 A. Mahatma Gandhi Kalwakurthy Lift Irrigation Project
 B. Nizam Sagar Project
 C. J. Chokka Rao Devadula Lift Irrigation Scheme
 D. Chanaka-Korata Barrage
 Choose the correct answer :
 (1) A-I, B-II, C-III, D-IV
 (2) A-II, B-I, C-III, D-IV
 (3) A-II, B-IV, C-I, D-III
 (4) A-II, B-I, C-IV, D-III
- List II
 River
 I. Godavari
 II. Krishna
 III. Penganga
 IV. Manjeera

105. According to the Space Tech Framework April 2022, of the Government of Telangana, which of the following are part of the Space Market Value Chain ?

- A. Launch Services including Teleport and Mission Control ✓
- B. Satellite Manufacturing/Launcher Manufacturing ✓
- C. Satellite Operations and Capacity Services ✓
- D. Establishing Space Stations in the Orbit

Choose the correct answer :

- ~~(1) B and C only~~
- (3) A, B, C and D**
- (2) B, C and D only
- ~~(4) A, B and C only~~

106. Consider the following in relation to the 'Gruha Jyothi' scheme of the Government of Telangana.

- A. All the residents are eligible for free electricity up to 200 units per month, either for domestic or petty business.
- B. DISCOMs will send the details of subsidy to be received in the scheme by 20th of every month and Government will release the subsidy amount to DISCOMs.

Which of the above statements is/are correct ?

- (1) Neither A nor B
- (2) B only**
- (3) Both A and B
- (4) A only

107. Arrange the following sectors/items in ascending order based on proposed allocations (in ₹ crore) for these sectors/items in Telangana State vote on account budget for the financial year 2024 presented to the State Legislature on 10th February, 2024 :

- A. SC Welfare
- B. Capital Expenditure
- C. Education
- D. Medical and Health

Choose the correct order :

- (1) B, A, C, D
- (2) D, C, A, B**
- (3) D, A, C, B
- (4) A, B, D, C

108. Which of the following two countries conducted a Joint Military Exercise "SADA TANSEEQ" during January - February 2024 ?

- (1) Pakistan - Tanzania
- (2) India - Saudi Arabia**
- (3) India - Afghanistan
- (4) Iran - Kazakhstan

109. Who was appointed as the National Icon for Voter Awareness and Education for the Eleventh Commission of India in October 2023 ?

- (1) Virat Kohli
- (2) Rajkummar Rao**
- (3) Sonu Sood
- ~~(4) Pankaj Tripathi~~

110. Which of the following statements about Gaganyaan are true ?

- A. LVM-3 rocket is the launch vehicle for Gaganyaan mission.
- B. It consists of solid stage, liquid stage and cryogenic stage.
- C. It has an Orbital Module (OM) which comprises of Crew Module (CM) and Service Module (SM).
- D. It envisages demonstration of human space flight capabilities by launching crew of 5 to Earth's orbit at 500 kilometers.

Choose the correct answer :

- (1) ~~B and D only~~
- (3) A and B only
- (2) B and C only
- (4) A, B and C only**

111. Who among the following from Telangana State was conferred Padma Shri award for the year 2023 in the field of Literature and Education ?

- (1) Kethavath Somlal**
- (2) Omprakash Sharma
- (3) Uma Maheswari D.
- (4) Harish Nayak

112. Which country hosted the 8th International Maritime Security Conference 2023 ?

- (1) Singapore**
- (2) Norway
- ~~(3) Australia~~
- (4) Philippines

113. In which country was the Conference of Parties COP-26 held ?
 (1) Australia (2) Glasgow, UK (3) Saudi Arabia (4) Egypt
114. Arrange the following States in descending order based on percentage of Geographical Area recorded Forest Area (RFA) in 2021 as per the India - State of Forest Report - 2021 published by Forest Survey of India :
 A. Nagaland B. Sikkim C. Mizoram D. Arunachal Pradesh
 Choose the correct order :
 (1) D, B, A, C (2) B, A, D, C (3) B, D, A, C (4) A, B, D, C
115. Which of the following statements about Agni-5 are correct ?
 A. It uses a three-stage solid-fuelled engine.
 B. It is capable of striking targets at ranges up to 2000 kilometers only.
 C. It is indigenously developed by DRDO.
 D. It uses Multiple - Dependable Targetable Re-entry Vehicle (MDRV) technology.
 Choose the correct answer :
 (1) A and C only (2) A, B and C only
 (3) A, C and D only (4) A and B only

116. Which of the following statements related to Aditya-L1 is/are true ?
 A. The orbit of Aditya-L1 is located roughly 15 million kilometers away from the Earth.
 B. The mission will help us in understanding Coronal Mass Ejections.
 Choose the correct answer :
 (1) Neither A nor B (2) B only
 (3) Both A and B (4) A only

117. Match the following in relation to 2023 Nobel Prizes :

Name of the person	Subject / Field
A. Jon Fosse	I. Physics
B. Narges Mohammadi	II. Chemistry
C. Aleksey Yekimov	III. Peace
D. Ferenc Krausz	IV. Literature
	V. Physiology or Medicine

Choose the correct answer :

- (1) A-V; B-III; C-I; D-II (2) A-III; B-IV; C-I; D-II
 (3) A-IV; B-III; C-II; D-I (4) A-III; B-IV; C-II; D-V

118. Which of the following statements about G-20 is/are correct ?
 A. India held the presidency of the G-20 from 1st December 2022 to 30th November 2023.
 B. New Zealand is a member country of G-20 as of 2023.
 C. G-20 is the premier forum for international humanitarian co-operation.
 D. G-20 was founded in 1998.

Choose the correct answer :

- (1) A only (2) B, C and D only
 (3) A and B only (4) A, B and D only

119. Match the following sportspersons with their respective sports :

Name of the person	Name of the sport
A. Pravin Jadhav	I. Cycling
B. Singhraj Adhana	II. Gymnastics
C. Aaryan Davande	III. Archery
D. J. Srimathi	IV. Football
	V. Shooting

Choose the correct answer :

- (1) A-III; B-V; C-II; D-I (2) A-V; B-I; C-IV; D-II
 (3) A-III; B-V; C-I; D-IV (4) A-IV; B-II; C-III; D-V

120. Match the following Sahitya Akademi awardees in poetry for the year 2023 with the language which they were conferred the award :

Name of the awardee	Language
A. Vijay Verma	I. Sanskrit
B. Arun Ranjan Mishra	II. Kashmiri
C. Manshoor Banihali	III. Gujarati
D. Vinod Joshi	IV. Dogri

Choose the correct answer :

- (1) A-I; B-IV; C-III; D-II
 (2) A-II; B-III; C-I; D-IV
 (3) A-IV; B-I; C-II; D-III
 (4) A-IV; B-II; C-III; D-I

121. Who amongst the following were appointed as Election Commissioners of India in March 2024?

- A. Rajiv Kumar
 B. Gyanesh Kumar
 C. Sukhbir Singh Sandhu
 D. Arun Kumar Goel

- Choose the correct answer :
 (1) B and C only
 (2) A, C and D only
 (3) A and C only
 (4) B, C and D only

122. Which one of the following is currently the leading energy storage system type for use in electric vehicles?

- (1) Ultracapacitors
 (2) Lithium-ion batteries
 (3) Nickel-metal hydride batteries
 (4) Lead-acid batteries

123. According to India State of Forest Report (ISFR) 2021, the percentage of the country's geographical area covered by forests is approximately :

- (1) 25.6%
 (2) 21.7%
 (3) 23.1%
 (4) 19.1%

124. Which of the following symmetry is not found in animals?

- (1) Circular symmetry
 (2) Bilateral symmetry
 (3) Asymmetry
 (4) Radial symmetry

125. Chandrayaan-2 carried eight experiment payloads on board for studying surface geological composition and exospheric measurements of Moon. One of the experiment payloads is CLASS. Which of the statements are not true?

- A. CLASS is Chandrayaan-2 Large Area Sensitive X-ray Spectrometer.
 B. CLASS measures the Moon's X-ray Fluorescence (XRF) spectra.
 C. XRF technique will detect major elements such as Mg, Al, Si, Ca, Ti, etc.
 D. CLASS is an imaging spectrometer.

Choose the answer :

- (1) A and D only
 (2) B and C only
 (3) C and D only
 (4) A and B only

126. Consider the following statements :

- A. A well-known Indian statistician P.C. Mahalanobis is greatly popular for introducing new methods of sampling.
 B. Meghnad Saha was a geographer best known for his development of the Saha equation, used to describe physical conditions in Geography.

Which of the above statements is/are correct?

- (1) Neither A nor B
 (2) B only
 (3) Both A and B
 (4) A only

127. Consider the following programmes by the Department of Science & Technology to support Science and Technology :

- A. Strengthening, Upscaling and Nurturing Local Innovations for Livelihood
- B. Technology Interventions for Disabled and Elderly
- C. Tribal Science Plan
- D. Innovation in Science Pursuit for Inspired Research

Which of the above are correct ?

- (1) B, C and D only
- (2) C and D only
- (3) A, B and C only
- (4) A, B and D only

128. Arrange the names of the following Nobel Laureates in the chronological order of their receiving prizes :

- A. Venkatraman Ramakrishnan
- B. Subrahmanyan Chandrasekhar
- C. C.V. Raman
- D. Har Gobind Khorana

Choose the correct order :

- (1) A, C, D, B
- (2) A, B, D, C
- (3) C, B, A, D
- (4) C, D, B, A

129. Arrange in the sequence, the ISRO rockets in order of their payload (low to high) :

- I. Satellite Launch Vehicle (SLV-3)
- II. Geosynchronous Satellite Launch Vehicle (GSLV)
- III. Polar Satellite Launch Vehicle (PSLV-XL)
- IV. Augmented Satellite Launch Vehicle (ASLV)

Choose the correct answer :

- (1) I, III, II, IV
- (2) I, III, IV, II
- (3) I, II, III, IV
- (4) I, IV, III, II

130. Match the following Acts/Rules in India with respect to their year of passing :

Act / Rule in India	Year of passing
A. Forest (Conservation) Act	I. 2010
B. National Green Tribunal Act	II. 2016
C. Wild Life (Protection) Act	III. 2002
D. Hazardous Wastes (Management, Handling and Transboundary Movement) First Amendment Rules	IV. 1972
E. Biological Diversity Act	V. 1980
	VI. 2020

Choose the correct answer :

- (1) A-V; B-I; C-IV; D-II, E-III
- (2) A-I; B-IV; C-V; D-III, E-II
- (3) A-VI; B-V; C-IV; D-II, E-III
- (4) A-V; B-I, C-IV, D-III, E-VI

131. The core loading of India's first indigenous Fast Breeder Reactor was conducted on 4th March,

at :

- (1) Tarapur, Maharashtra
- (2) Kalpakkam, Tamil Nadu
- (3) Narora, Uttar Pradesh
- (4) Kaiga, Karnataka

132. Which of the following hormone is insect specific and not exclusively a plant hormone ?

- (1) Cytokinin
- (2) Juvenile
- (3) Gibberellin
- (4) Auxin

133. Yellow Revolution is related to :

- (1) Oilseed production
- (2) Egg production
- (3) Poultry and meat production
- (4) Jute fiber production

134. Consider the following statements about India's Pharmaceutical Sector :

Assertion (A) :

The Bureau of Pharma PSUs of India (BPPI) educates the public about the usage of the Jan Aushadhi generic medicines.

Reason (R) :

The Government of India has set a target to increase the number of Pradhan Mantri Janaushadhi Kendras to 10,000 by March, 2024.

Choose the correct answer :

- (1) Both (A) and (R) are true, but (R) is not the correct explanation of (A).
(2) Both (A) and (R) are true and (R) is the correct explanation of (A).
(3) (A) is false, but (R) is true.
(4) (A) is true, but (R) is false.

135. Jal Jeevan Mission is a Government of India programme. Which of the following statements are correct about Jal Jeevan Mission ?

- A. 'Har Ghar Jal' initiative was launched in 2019.
B. Goa became the first certified Har Ghar Jal State in August 2022.
C. Har Ghar Jal initiative is set to provide all rural households with safe drinking water through taps by 2025.
D. More than 73.7% households are reported to have tap water supply as on 30.01.2024.

Choose the correct answer :

- (1) A, C and D only
(2) A, B and C only
(3) A, B and D only
(4) A and B only

136. Consider the following statements related to India's National Science Day :

- A. It is celebrated every year on February 28th.
B. It commemorates the day of the announcement of the discovery of the Raman Effect.
C. The official theme for the year 2024 was "Global Science for Global Wellbeing".
D. The official theme for the year 2024 was "Indigenous Technologies for Viksit Bharat".

Which of the above statements are correct ?

- (1) A, C and D only
(2) A, B and D only
(3) A and C only
(4) B, C and D only

137. What is the name of the Central Programme launched to promote Artificial Intelligence in India and beyond ?

- (1) VIKASai
(2) INDIAai
(3) BHIMai
(4) AI4Bharat

138. Match the following diseases with their carrier type :

Disease	Carrier type
A. Cholera	I. Air-borne
B. Filaria	II. Food-borne
C. Tuberculosis	III. Vector-borne
	IV. Water-borne

Choose the correct answer :

- (1) A-II; B-IV; C-III
(2) A-IV; B-III; C-I
(3) A-II; B-IV; C-I
(4) A-IV; B-I; C-III

139. Identify the correct statement(s) among the following :

- A. The Indian Ministry of External Affairs described the first Pokhran test as a peaceful nuclear explosion.
B. This nuclear test was code-named 'Smiling Buddha'.

Choose the correct answer :

(1) Neither A nor B

(2) B only

(3) Both A and B

(4) A only

140. Match the following vitamin deficiencies with their associated health problems :

Vitamin deficiency	Health problem
A. Vitamin A	I. Beriberi
B. Vitamin B1	II. Night blindness
C. Vitamin D	III. Scurvy
D. Vitamin C	IV. Rickets

Choose the correct answer :

(1) ~~A-III, B-II, C-I, D-IV~~

(2) ~~A-I, B-III, C-II, D-IV~~

(3) A-II; B-I; C-IV; D-III

(4) A-II; B-I; C-III; D-IV

141. Consider the following statements regarding the Indian lunar lander that successfully touched down on the lunar surface :

- A. Its name was Chandrayaan-2.
B. It was launched from the Satish Dhawan Space Centre on 14th July, 2023.
C. A lunar touchdown occurred on 23rd August, 2023 just after 6:00 PM IST.

Which of the above statements is/are correct ?

(1) ~~C only~~

(2) B and C only

(3) A and B only

(4) ~~A and C only~~

142. Raman Research Institute is located at X, India and was founded by Y in 1948. X and Y are respectively :

(1) Trivandrum, Vikram Sarabhai

(2) Bengaluru, Vikram Sarabhai

(3) Trivandrum, C.V. Raman

(4) Bengaluru, C.V. Raman

143. Match the following satellites with the year of their launching :

Satellite	Year of Launching
A. Bhaskara-II	I. 1988
B. GSAT-10	II. 1981
C. IRS-1A	III. 1990
D. INSAT-1D	IV. 2011
	V. 2012

Choose the correct answer :

(1) ~~A-V, B-II, C-IV, D-I~~

(3) A-II; B-III; C-I; D-IV

(2) A-II; B-V; C-I; D-III

(4) ~~A-IV; B-V; C-II; D-I~~



144. Covaxin, India's indigenous COVID-19 vaccine, was developed by :

- I. Bharat Biotech ✓
- II. Serum Institute of India Pvt. Ltd.
- III. Pharmacy Council of India – AstraZeneca
- IV. Indian Council of Medical Research (ICMR) – National Institute of Virology (NIV)

Choose the correct answer :

- ~~(1) II and IV~~
- (2) II and III
- (3) I and III
- (4) I and IV

145. Arrange the following BIMSTEC Secretaries General in chronological order :

- A. Sumith Nakandala
- B. Indra Mani Pandey
- C. Tenzin Lekphell
- D. M. Shahidul Islam

Choose the correct order :

- (1) D, A, B, C
- (2) C, B, A, D
- ~~(3) A, B, C, D~~
- (4) A, D, C, B

146. Which of the following statements about the United Nations (UN) are correct ?

- A. The United Nations has six principal organs.
- ~~B. The General Assembly is composed of representatives from all member states, each of which has an equal vote.~~
- C. The International Criminal Court (ICC), being an organ of UN, settles disputes between nations.
- D. The main function of UN Economic and Social Council is facilitating discussion and policy recommendations for the world's economic and social issues.

Choose the correct answer :

- (1) A, B and C only
- (2) C and D only
- ~~(3) A, B and D only~~
- (4) A and B only

147. Consider the following statements in relation to the Belt and Road Initiative (BRI) :

- A. It is a global infrastructure project that was developed and launched by China in 2013.
- B. It is aimed at strengthening China's soft power in Asia, Africa and Europe by establishing land and sea trade routes.

Which of the above statements is/are true ?

- (1) Neither A nor B are true
- ~~(2) Only B is true~~
- ~~(3) Both A and B are true~~
- (4) Only A is true

148. Which of the following organisation has jurisdiction over the Convention on the Prevention and Punishment of the Crime of Genocide, 1948, also known as Genocide Convention ?

- (1) United Nations General Assembly (UNGA)
- (2) Permanent Court of Arbitration (PCA)
- ~~(3) International Criminal Court (ICC)~~
- ~~(4) International Court of Justice (ICJ)~~

149. Which of the following is marked by the Bandung Conference, 1955 ?

- (1) Declaration on the establishment of a New International Economic Order (NIEO)
- ~~(2) The beginning of the Non-Aligned Movement (NAM)~~
- (3) The formation of ASEAN
- (4) Panchsheel Agreement between India and China

150. Consider the following statements in connection with the Bretton Woods Conference :

- A. This conference was held in 1944, at New Hampshire, USA, to discuss the post-war international economic order.
- B. The conference paved the way for the formation of International Monetary Fund (IMF) and the World Bank.

Which of the above statements is/are correct ?

- (1) Neither A nor B
- ~~(2) B only~~
- (3) Both A and B
- (4) A only



Question Paper Booklet Number
(Candidate to enter and bubble this number in the
OMR Answer Sheet)

230878

KEY SOLUTION

Signature of the invigilator
(to be obtained by the candidate)

Hall Ticket Number
(To be filled by the candidate below)

Chalaga

24 24 99 24 6

Duration : 150 Minutes

Max. Marks : 150

INSTRUCTIONS TO CANDIDATES

- CANDIDATE SHOULD READ ALL THE INSTRUCTIONS PRINTED ON THE QUESTION PAPER BOOKLET BEFORE STARTING TO ANSWER.
- Candidate shall write the Hall Ticket Number in the box provided on this Question Paper Booklet before opening the SEAL.
- Candidate should not open the Question Paper Booklet SEAL, until the indication is given by the invigilator to start answering.
- On opening the Question Paper Booklet SEAL and before entering the Question Paper Booklet Number on the OMR Answer Sheet ensure that the Question Paper Booklet contains all the 150 multiple choice questions printed on it. If there are any defects like missing papers, missing questions, improper print, please ask the invigilator for replacement of the Question Paper Booklet immediately.
- Only after satisfying that the Question Paper Booklet is in full shape, the candidate shall enter the Question Paper Booklet Number on the OMR Answer Sheet.
- Each question is followed by 4 choices : (1),(2),(3)and(4). Candidate has to select only one answer choice and darken the appropriate circle for that question in the OMR Answer Sheet. If more than one circle is darkened for any question, it will be considered as invalid.
- Candidate has to obtain the signature of the invigilator in the appropriate box provided on the Question Paper Booklet.
- Rough work should be done only in the space provided for that purpose in the Question Paper Booklet. No other loose sheet of paper will be allowed into the Examination hall.
- Do not mark answer choices on the Question Paper Booklet. The digital copy of each candidate's answered OMR Answer Sheet will be made available in the candidate's login in due course.
- The Question Paper Booklet is printed bilingually. viz., English/Telugu or English/Urdu. In case of any discrepancy between English and Telugu or between English and Urdu versions, English version shall be treated as final. If appropriate word for any English word is not found in Telugu or Urdu, it would be transliterated.
- Candidate should not leave the Examination hall until the completion of the examination time.
- Candidate should not leave the Examination hall without giving the biometric attendance. If any candidate does not give his/her biometric attendance, his/her OMR Answer Sheet would not be evaluated.
- Before leaving the Examination hall, the candidate should hand over the OMR Answer Sheet to the invigilator failing which Criminal Prosecution will be initiated as per law, besides rejecting the candidature for this examination.
- Candidates are permitted to take away the Question Paper Booklet with them after completion of the examination and it should be preserved till the declaration of results.

అభ్యర్థులకు సూచనలు

- అభ్యర్థులు సమాధానాలను గుర్తించి వృత్తాలను నింపే ముందే ప్రశ్నాపత్రం లోని సూచనలన్నిటినీ తప్పనిసరిగా చదువవలెను.
- అభ్యర్థులు తమ హాల్ టికెట్ సంఖ్యను ప్రశ్నపత్రము పై నిర్దేశిత ఫలములో సీల్ తెరవకముందే పూరించవలెను.
- అభ్యర్థులు సీలు చేయబడిన ప్రశ్నాపత్రాలను ఇన్విజిలేటర్ ఆదేశాలు జారీ చేయునంత వరకు తెరవకూడదు.
- ప్రశ్నపత్రము యొక్క సీల్ తొలగించిన వెంటనే మరియు OMR సమాధాన పత్రములో ప్రశ్నాపత్రం నెంబర్ ను నింపకముందే అందులోని 150 ప్రశ్నలు, వాటికిచ్చిన ఇచ్చికాలు అన్ని సరిగా ముద్రింపబడాయో లేదో జాగ్రత్తగా పరిశీలించండి. ఏదైనా పేజీలు లేకపోయినా లేదా సరిగా ముద్రింపబడకపోయినా వెంటనే ఇన్విజిలేటర్ ను సంప్రదించి మరియు ప్రశ్నపత్రాన్ని పొందగలరు.
- ప్రశ్నపత్రము లోని అన్ని పేజీలు పూర్తిగా మరియు సరిగా ఉన్నవని నిర్ధారించుకున్న తరువాత OMR సమాధాన పత్రము నందు నిర్దేశించిన ఫలములో ప్రశ్నపత్రము యొక్క బుక్ లేట్ సంఖ్య పూరించవలెను.
- ప్రతి ప్రశ్నకు నాలుగు ఐచ్చికాలు అనగా (1), (2), (3) మరియు (4) ఇవ్వబడతాయి. అందులో ఒక సమాధానమును మాత్రమే ఎన్నుకొని దానికి సంబంధించిన వృత్తాన్ని మాత్రమే నింపవలెను. ఒక ప్రశ్నకు ఒకటికంటే ఎక్కువ వృత్తాలను నింపినచో ఆ ప్రశ్న చెల్లనిదిగా పరిగణించబడుతుంది.
- ప్రశ్నపత్రము పై నిర్దేశించబడిన ఫలములో ఇన్విజిలేటర్ సంతకము పొందవలెను.
- ప్రశ్నపత్రము లో నిర్దేశించబడిన ఫలమును మాత్రమే చిత్త పని (rough work) కొరకు ఉపయోగించవలెను. పరీక్ష గదిలోకి విడి కాగితములను అనుమతించబడవు.
- సమాధాన ఐచ్చికాలను ప్రశ్నాపత్రము పై గుర్తు పెట్టడం అనుమతించబడదు. పరీక్షకు హాజరైన ప్రతి అభ్యర్థి OMR సమాధాన పత్రము యొక్క డిజిటల్ స్కాన్ కోపీని అభ్యర్థి లాగిన్ లో తగిన సమయంలో అందుబాటులో ఉంచబడును.
- ప్రశ్న పత్రము రెండు భాషలలో (ఇంగ్లీష్/తెలుగు, ఇంగ్లీష్/ఉర్దూ) ముద్రింపబడినది. ప్రశ్నాపత్రము నందు ఇంగ్లీష్/పర్షియన్ మరియు తెలుగు/ఉర్దూ/పర్షియన్ల మధ్య ఏదైనా వ్యత్యాసం ఉంటే, ఇంగ్లీష్/పర్షియన్లో ఉన్నదే సరియైనది గా పరిగణించబడుతుంది. ఏదైనా ఇంగ్లీష్ పదానికి సరైన తెలుగు లేదా ఉర్దూ పదము లేనిచో, ఇంగ్లీష్ పదమునే తెలుగు/ఉర్దూ లలో వ్రాయబడును.
- పరీక్ష పూర్తయ్యే వరకు అభ్యర్థి పరీక్ష గదిని విడిచి వెళ్ళటానికి అనుమతించబడదు.
- బయోమెట్రిక్ అటెండెన్స్ ఇవ్వకుండా అభ్యర్థి పరీక్ష గదిని వదిలి వెళ్ళడానికి అనుమతించబడదు. ఒకవేళ అలా వెళ్ళినట్లయితే OMR సమాధాన పత్రము మూల్యాంకనం చేయబడదు.
- అభ్యర్థులు తప్పనిసరిగా OMR సమాధాన పత్రమును తిరిగి ఇచ్చివేయవలెను లేనిచో క్రిమినల్ ప్రాసీక్యూషన్ చేయడం తో పాటు అభ్యర్థి యొక్క అభ్యర్థిత్వం రద్దు చేయబడును.
- పరీక్ష అనంతరం ప్రశ్నా పత్రాన్ని అభ్యర్థులు తమ వెంట తీసుకొని వెళ్ళవచ్చు. పరీక్ష ఫలితాలను వెల్లడించేవరకు తమ వద్ద ప్రశ్న పత్రాన్ని భద్ర పరచుకోవలెను.

